

# Chapter 29

## Magnetic Fields due to Currents

## 29.2: Calculating the Magnetic Field due to a Current

The magnitude of the field  $d\mathbf{B}$  produced at point  $P$  at distance  $r$  by a current length element  $i ds$  turns out to be

$$dB = \frac{\mu_0}{4\pi} \frac{i ds \sin \theta}{r^2},$$

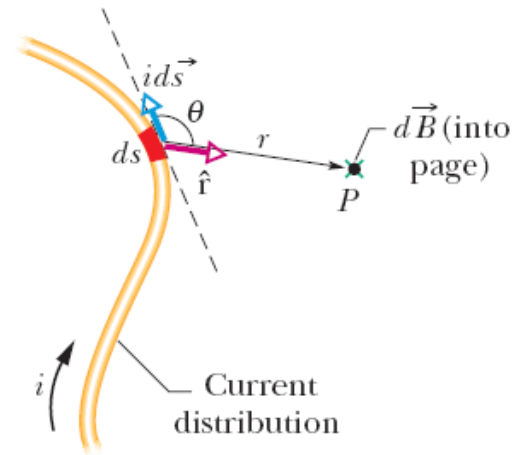
where  $\theta$  is the angle between the directions of  $i ds$  and  $\hat{r}$ , a unit vector that points from  $ds$  toward  $P$ . Symbol  $\mu_0$  is a constant, called the permeability constant, whose value is

$$\mu_0 = 4\pi \times 10^{-7} \text{ T} \cdot \text{m/A} \approx 1.26 \times 10^{-6} \text{ T} \cdot \text{m/A}.$$

Therefore, in vector form

$$d\vec{B} = \frac{\mu_0}{4\pi} \frac{i d\vec{s} \times \hat{r}}{r^2} \quad (\text{Biot-Savart law}).$$

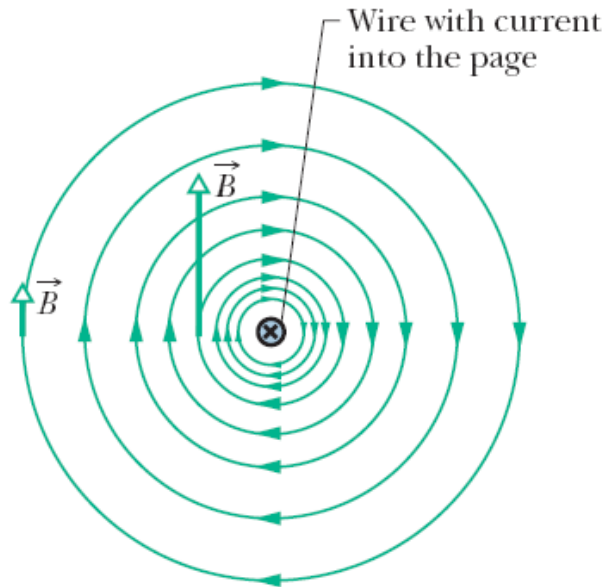
This element of current creates a magnetic field at  $P$ , into the page.



**Fig. 29-1** A current-length element  $i d\vec{s}$  produces a differential magnetic field  $d\vec{B}$  at point  $P$ . The green  $\times$  (the tail of an arrow) at the dot for point  $P$  indicates that  $d\vec{B}$  is directed *into* the page there.

## 29.2: Magnetic Field due to a Long Straight Wire:

The magnetic field vector at any point is tangent to a circle.



**Fig. 29-2** The magnetic field lines produced by a current in a long straight wire form concentric circles around the wire. Here the current is into the page, as indicated by the  $\times$ .


The magnitude of the magnetic field at a perpendicular distance  $R$  from a long (infinite) straight wire carrying a current  $i$  is given by

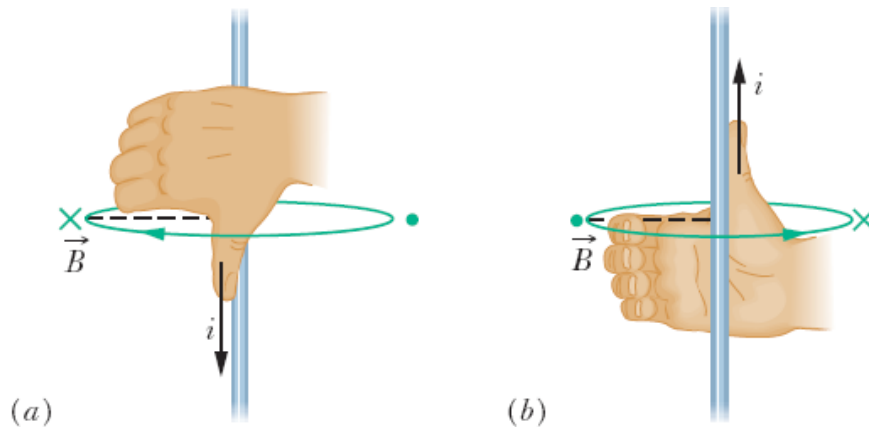
$$B = \frac{\mu_0 i}{2\pi R} \quad (\text{long straight wire}).$$



**Fig. 29-3** Iron filings that have been sprinkled onto cardboard collect in concentric circles when current is sent through the central wire. The alignment, which is along magnetic field lines, is caused by the magnetic field produced by the current. (*Courtesy Education Development Center*)

## 29.2: Magnetic Field due to a Long Straight Wire:

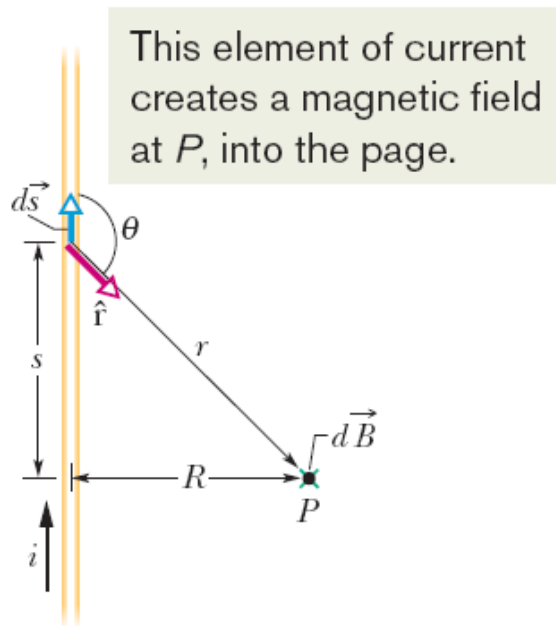
 **Right-hand rule:** Grasp the element in your right hand with your extended thumb pointing in the direction of the current. Your fingers will then naturally curl around in the direction of the magnetic field lines due to that element.



The thumb is in the current's direction. The fingers reveal the field vector's direction, which is tangent to a circle.

**Fig. 29-4** A right-hand rule gives the direction of the magnetic field due to a current in a wire. (a) The magnetic field  $\vec{B}$  at any point to the left of the wire is perpendicular to the dashed radial line and directed into the page, in the direction of the fingertips, as indicated by the x. (b) *If the current is reversed*, at any point to the left is still perpendicular to the dashed radial line but now is directed out of the page, as indicated by the dot.

## 29.2: Magnetic Field due to a Long Straight Wire:



**Fig. 29-5** Calculating the magnetic field produced by a current  $i$  in a long straight wire. The field  $d\vec{B}$  at  $P$  associated with the current-length element  $i d\vec{s}$  is directed into the page, as shown.

$$dB = \frac{\mu_0}{4\pi} \frac{i ds \sin \theta}{r^2}.$$

$$\rightarrow B = 2 \int_0^\infty dB = \frac{\mu_0 i}{2\pi} \int_0^\infty \frac{\sin \theta ds}{r^2}.$$

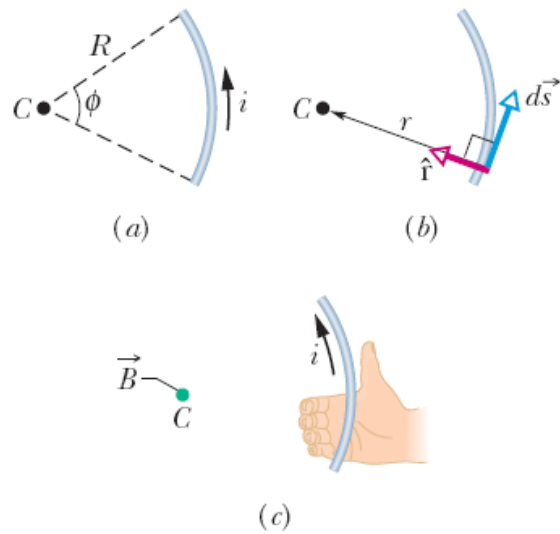
$$r = \sqrt{s^2 + R^2}$$

$$\sin \theta = \sin(\pi - \theta) = \frac{R}{\sqrt{s^2 + R^2}}.$$

$$\begin{aligned} \rightarrow B &= \frac{\mu_0 i}{2\pi} \int_0^\infty \frac{R ds}{(s^2 + R^2)^{3/2}} \\ &= \frac{\mu_0 i}{2\pi R} \left[ \frac{s}{(s^2 + R^2)^{1/2}} \right]_0^\infty = \frac{\mu_0 i}{2\pi R} \end{aligned}$$

$$B = \frac{\mu_0 i}{4\pi R} \quad (\text{semi-infinite straight wire}).$$

## 29.2: Magnetic Field due to a Current in a Circular Arc of Wire:



The right-hand rule reveals the field's direction at the center.

$$dB = \frac{\mu_0}{4\pi} \frac{i ds \sin 90^\circ}{R^2} = \frac{\mu_0}{4\pi} \frac{i ds}{R^2}.$$

$$B = \int dB = \int_0^\phi \frac{\mu_0}{4\pi} \frac{iR d\phi}{R^2} = \frac{\mu_0 i}{4\pi R} \int_0^\phi d\phi.$$

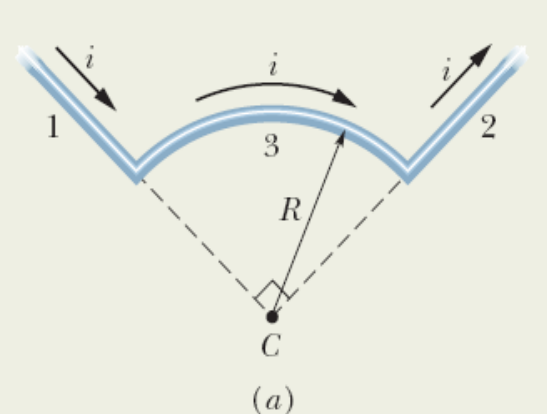
$$B = \frac{\mu_0 i \phi}{4\pi R} \quad (\text{at center of circular arc}).$$

$$B = \frac{\mu_0 i (2\pi)}{4\pi R} = \frac{\mu_0 i}{2R} \quad (\text{at center of full circle}).$$

**Fig. 29-6** (a) A wire in the shape of a circular arc with center  $C$  carries current  $i$ . (b) For any element of wire along the arc, the angle between the directions of  $d\vec{s}$  and  $\hat{r}$  is  $90^\circ$ . (c) Determining the direction of the magnetic field at the center  $C$  due to the current in the wire; the field is out of the page, in the direction of the fingertips, as indicated by the colored dot at  $C$ .

## Example, Magnetic field at the center of a circular arc of a circle.:

The wire in Fig. 29-7a carries a current  $i$  and consists of a circular arc of radius  $R$  and central angle  $\pi/2$  rad, and two straight sections whose extensions intersect the center  $C$  of the arc. What magnetic field  $\vec{B}$  (magnitude and direction) does the current produce at  $C$ ?



**Straight sections:** For any current-length element in section 1, the angle  $\theta$  between  $d\vec{s}$  and  $\hat{r}$  is zero (Fig. 29-7b); so Eq. 29-1 gives us

$$dB_1 = \frac{\mu_0}{4\pi} \frac{i ds \sin \theta}{r^2} = \frac{\mu_0}{4\pi} \frac{i ds \sin 0}{r^2} = 0.$$

Thus, the current along the entire length of straight section 1 contributes no magnetic field at  $C$ :

$$B_1 = 0.$$

The same situation prevails in straight section 2, where the angle  $\theta$  between  $d\vec{s}$  and  $\hat{r}$  for any current-length element is  $180^\circ$ . Thus,

$$B_2 = 0.$$

**Circular arc:** Application of the Biot–Savart law to evaluate the magnetic field at the center of a circular arc leads to Eq. 29-9 ( $B = \mu_0 i \phi / 4\pi R$ ). Here the central angle  $\phi$  of the arc is  $\pi/2$  rad. Thus from Eq. 29-9, the magnitude of the magnetic field  $\vec{B}_3$  at the arc's center  $C$  is

$$B_3 = \frac{\mu_0 i (\pi/2)}{4\pi R} = \frac{\mu_0 i}{8R}.$$

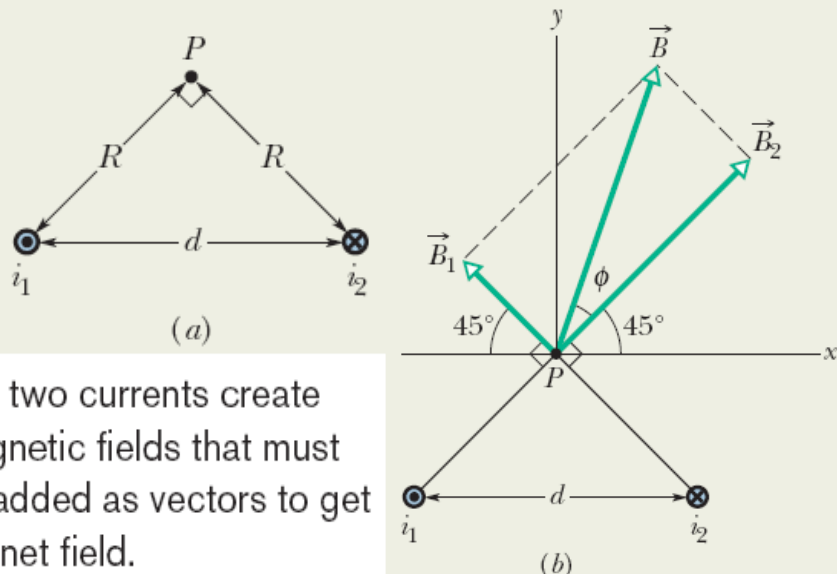
To find the direction of  $\vec{B}_3$ , we apply the right-hand rule displayed in Fig. 29-4. Mentally grasp the circular arc with your right hand as in Fig. 29-7c, with your thumb in the direction of the current. The direction in which your fingers curl around the wire indicates the direction of the magnetic field lines around the wire. They form circles around the wire, coming out of the page above the arc and going into the page inside the arc. In the region of point  $C$  (inside the arc), your fingertips point *into the plane* of the page. Thus,  $\vec{B}_3$  is directed into that plane.

**Net field:** Generally, when we must combine two or more magnetic fields to find the net magnetic field, we must combine the fields as vectors and not simply add their magnitudes. Here, however, only the circular arc produces a magnetic field at point  $C$ . Thus, we can write the magnitude of the net field  $\vec{B}$  as

$$B = B_1 + B_2 + B_3 = 0 + 0 + \frac{\mu_0 i}{8R} = \frac{\mu_0 i}{8R}. \quad (\text{Answer})$$

## Example, Magnetic field off to the side of two long straight currents:

Figure 29-8a shows two long parallel wires carrying currents  $i_1$  and  $i_2$  in opposite directions. What are the magnitude and direction of the net magnetic field at point  $P$ ? Assume the following values:  $i_1 = 15$  A,  $i_2 = 32$  A, and  $d = 5.3$  cm.



The two currents create magnetic fields that must be added as vectors to get the net field.

**Finding the vectors:** In Fig. 29-8a, point  $P$  is distance  $R$  from both currents  $i_1$  and  $i_2$ . Thus, Eq. 29-4 tells us that at point  $P$  those currents produce magnetic fields  $\vec{B}_1$  and  $\vec{B}_2$  with magnitudes

$$B_1 = \frac{\mu_0 i_1}{2\pi R} \quad \text{and} \quad B_2 = \frac{\mu_0 i_2}{2\pi R}.$$

In the right triangle of Fig. 29-8a, note that the base angles (between sides  $R$  and  $d$ ) are both  $45^\circ$ . This allows us to write  $\cos 45^\circ = R/d$  and replace  $R$  with  $d \cos 45^\circ$ . Then the field magnitudes  $B_1$  and  $B_2$  become

$$B_1 = \frac{\mu_0 i_1}{2\pi d \cos 45^\circ} \quad \text{and} \quad B_2 = \frac{\mu_0 i_2}{2\pi d \cos 45^\circ}.$$

**Adding the vectors:** We can now vectorially add  $\vec{B}_1$  and  $\vec{B}_2$  to find the net magnetic field  $\vec{B}$  at point  $P$ , either by using a vector-capable calculator or by resolving the vectors into components and then combining the components of  $\vec{B}$ . However, in Fig. 29-8b, there is a third method: Because  $\vec{B}_1$  and  $\vec{B}_2$  are perpendicular to each other, they form the legs of a right triangle, with  $\vec{B}$  as the hypotenuse. The Pythagorean theorem then gives us

$$\begin{aligned} B &= \sqrt{B_1^2 + B_2^2} = \frac{\mu_0}{2\pi d (\cos 45^\circ)} \sqrt{i_1^2 + i_2^2} \\ &= \frac{(4\pi \times 10^{-7} \text{ T}\cdot\text{m/A}) \sqrt{(15 \text{ A})^2 + (32 \text{ A})^2}}{(2\pi)(5.3 \times 10^{-2} \text{ m})(\cos 45^\circ)} \\ &= 1.89 \times 10^{-4} \text{ T} \approx 190 \mu\text{T}. \end{aligned} \quad (\text{Answer})$$

The angle  $\phi$  between the directions of  $\vec{B}$  and  $\vec{B}_2$  in Fig. 29-8b follows from

$$\phi = \tan^{-1} \frac{B_1}{B_2},$$

which, with  $B_1$  and  $B_2$  as given above, yields

$$\phi = \tan^{-1} \frac{i_1}{i_2} = \tan^{-1} \frac{15 \text{ A}}{32 \text{ A}} = 25^\circ.$$

The angle between the direction of  $\vec{B}$  and the  $x$  axis shown in Fig. 29-8b is then

$$\phi + 45^\circ = 25^\circ + 45^\circ = 70^\circ. \quad (\text{Answer})$$



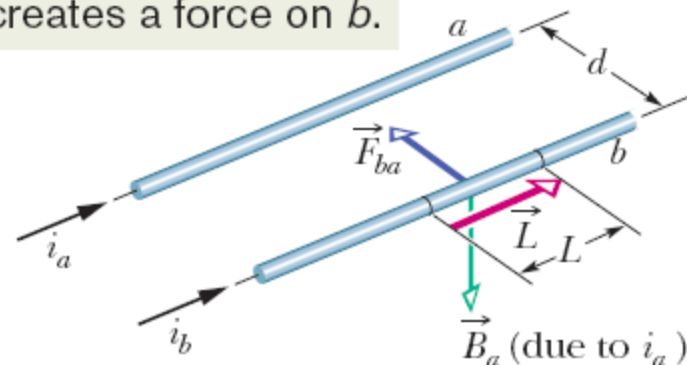
## 29.3: Force Between Two Parallel Wires:

$$B_a = \frac{\mu_0 i_a}{2\pi d}$$

$$\vec{F}_{ba} = i_b \vec{L} \times \vec{B}_a$$

$$F_{ba} = i_b L B_a \sin 90^\circ = \frac{\mu_0 L i_a i_b}{2\pi d}$$

The field due to  $a$  at the position of  $b$  creates a force on  $b$ .



**Fig. 29-9** Two parallel wires carrying currents in the same direction attract each other.  $\vec{B}_a$  is the magnetic field at wire  $b$  produced by the current in wire  $a$ .  $\vec{F}_{ba}$  is the resulting force acting on wire  $b$  because it carries current in  $\vec{B}_a$ .

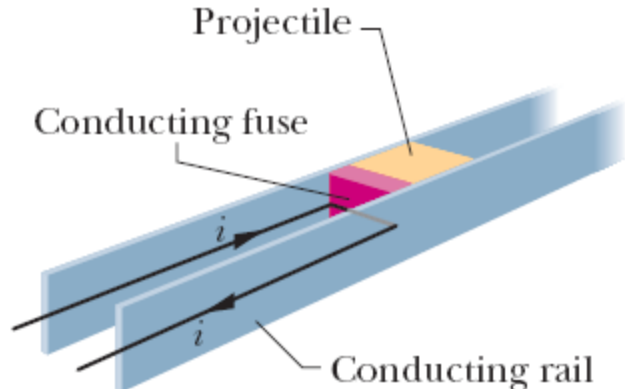


To find the force on a current-carrying wire due to a second current-carrying wire, first find the field due to the second wire at the site of the first wire. Then find the force on the first wire due to that field.

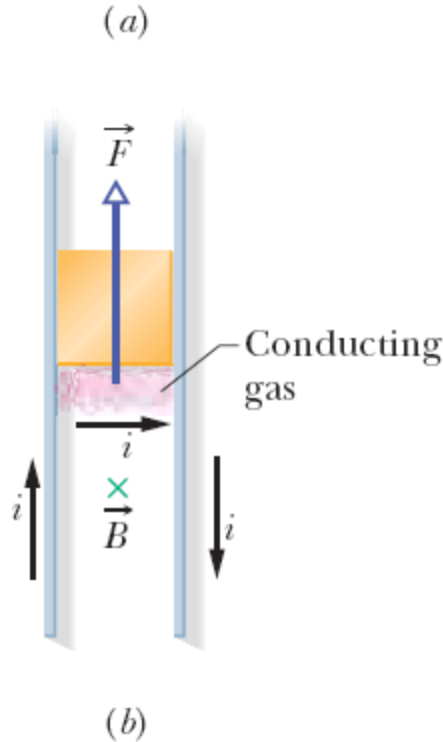


Parallel currents attract each other, and antiparallel currents repel each other.

### 29.3: Force Between Two Parallel Wires, Rail Gun:



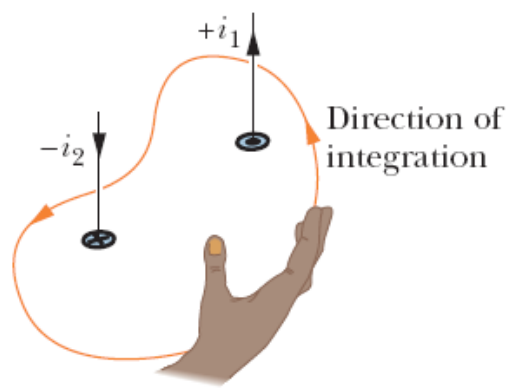
**Fig. 29-10** (a) A rail gun, as a current  $i$  is set up in it. The current rapidly causes the conducting fuse to vaporize. (b) The current produces a magnetic field  $\vec{B}$  between the rails, and the field causes a force  $\vec{F}$  to act on the conducting gas, which is part of the current path. The gas propels the projectile along the rails, launching it.



# 29.4: Ampere's Law:

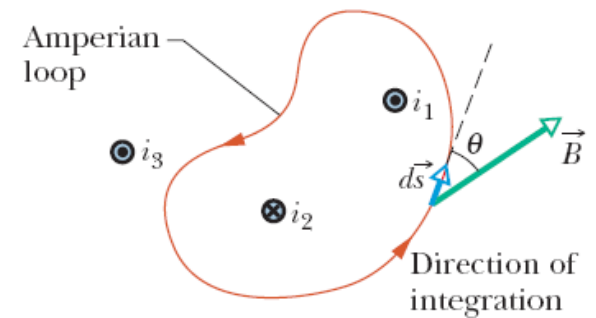
$$\oint \vec{B} \cdot d\vec{s} = \mu_0 i_{enc} \quad (\text{Ampere's law}).$$

This is how to assign a sign to a current used in Ampere's law.



**Fig. 29-12** A right-hand rule for Ampere's law, to determine the signs for currents encircled by an Amperian loop. The situation is that of Fig. 29-11.

Only the currents encircled by the loop are used in Ampere's law.

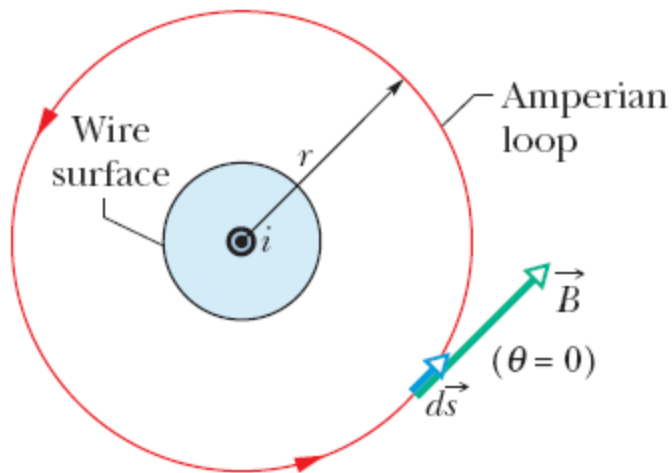


**Fig. 29-11** Ampere's law applied to an arbitrary Amperian loop that encircles two long straight wires but excludes a third wire. Note the directions of the currents.

*Curl your right hand around the Amperian loop, with the fingers pointing in the direction of integration. A current through the loop in the general direction of your outstretched thumb is assigned a plus sign, and a current generally in the opposite direction is assigned a minus sign.*

## 29.4: Ampere's Law, Magnetic Field Outside a Long Straight Wire Carrying Current:

All of the current is encircled and thus all is used in Ampere's law.



**Fig. 29-13** Using Ampere's law to find the magnetic field that a current  $i$  produces outside a long straight wire of circular cross section. The Amperian loop is a concentric circle that lies outside the wire.

$$\oint \vec{B} \cdot d\vec{s} = \oint B \cos \theta ds = B \oint ds = B(2\pi r).$$

$$B(2\pi r) = \mu_0 i$$

$$B = \frac{\mu_0 i}{2\pi r} \quad (\text{outside straight wire}).$$

## 29.4: Ampere's Law, Magnetic Field Inside a Long Straight Wire Carrying Current:

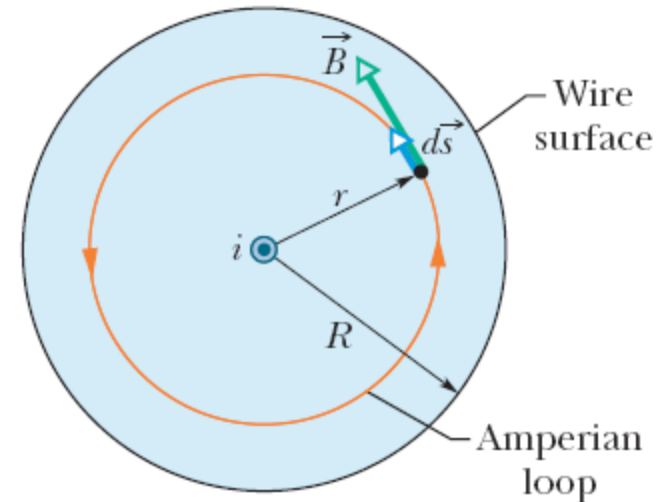
$$\oint \vec{B} \cdot d\vec{s} = B \oint ds = B(2\pi r).$$

$$i_{\text{enc}} = i \frac{\pi r^2}{\pi R^2}.$$

$$B(2\pi r) = \mu_0 i \frac{\pi r^2}{\pi R^2}$$

$$B = \left( \frac{\mu_0 i}{2\pi R^2} \right) r \quad (\text{inside straight wire}).$$

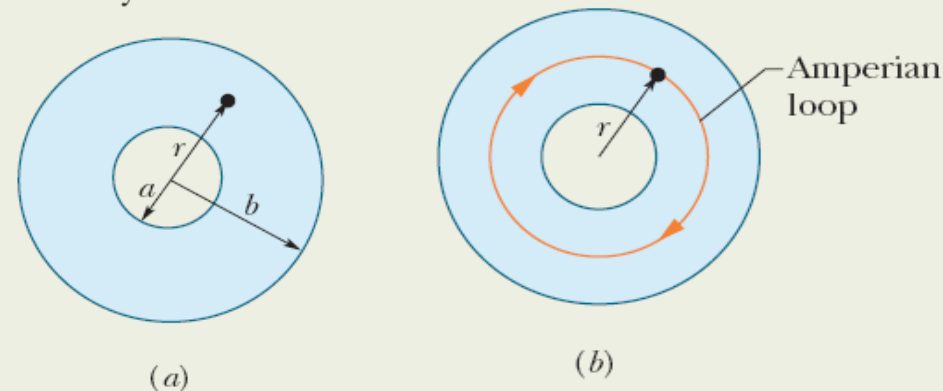
Only the current encircled by the loop is used in Ampere's law.



**Fig. 29-14** Using Ampere's law to find the magnetic field that a current  $i$  produces inside a long straight wire of circular cross section. The current is uniformly distributed over the cross section of the wire and emerges from the page. An Amperian loop is drawn inside the wire.

## Example, Ampere's Law to find the magnetic field inside a long cylinder of current.

Figure 29-15a shows the cross section of a long conducting cylinder with inner radius  $a = 2.0$  cm and outer radius  $b = 4.0$  cm. The cylinder carries a current out of the page, and the magnitude of the current density in the cross section is given by  $J = cr^2$ , with  $c = 3.0 \times 10^6$  A/m<sup>4</sup> and  $r$  in meters. What is the magnetic field  $\vec{B}$  at the dot in Fig. 29-15a, which is at radius  $r = 3.0$  cm from the central axis of the cylinder?



**Calculations:** We write the integral as

$$\begin{aligned} i_{\text{enc}} &= \int J dA = \int_a^r cr^2(2\pi r dr) \\ &= 2\pi c \int_a^r r^3 dr = 2\pi c \left[ \frac{r^4}{4} \right]_a^r \\ &= \frac{\pi c(r^4 - a^4)}{2}. \end{aligned}$$

$$\oint \vec{B} \cdot d\vec{s} = \mu_0 i_{\text{enc}},$$

gives us

$$B(2\pi r) = -\frac{\mu_0 \pi c}{2} (r^4 - a^4).$$

Solving for  $B$  and substituting known data yield

$$\begin{aligned} B &= -\frac{\mu_0 c}{4r} (r^4 - a^4) \\ &= -\frac{(4\pi \times 10^{-7} \text{ T} \cdot \text{m/A})(3.0 \times 10^6 \text{ A/m}^4)}{4(0.030 \text{ m})} \\ &\quad \times [(0.030 \text{ m})^4 - (0.020 \text{ m})^4] \\ &= -2.0 \times 10^{-5} \text{ T}. \end{aligned}$$

Thus, the magnetic field  $\vec{B}$  at a point 3.0 cm from the central axis has magnitude

$$B = 2.0 \times 10^{-5} \text{ T} \quad (\text{Answer})$$

# 29.5: Solenoids and Toroids:




Fig. 29-16 A solenoid carrying current  $i$ .

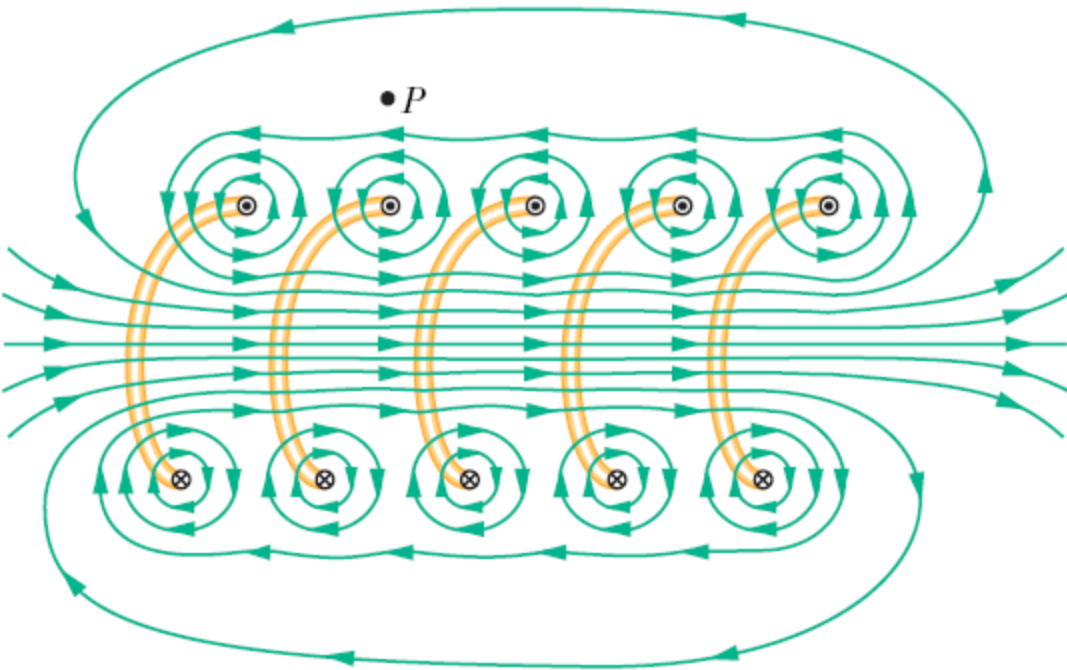
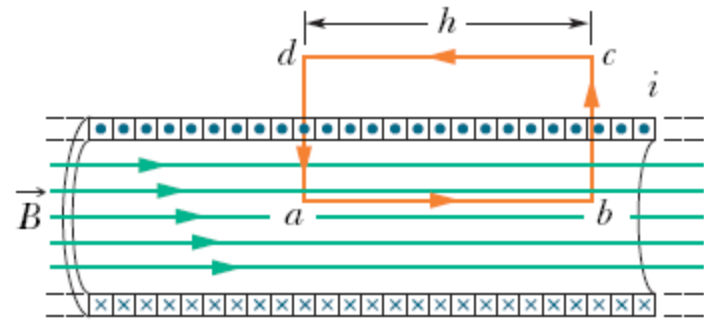


Fig. 29-17 A vertical cross section through the central axis of a “stretched-out” solenoid. The back portions of five turns are shown, as are the magnetic field lines due to a current through the solenoid. Each turn produces circular magnetic field lines near itself. Near the solenoid’s axis, the field lines combine into a net magnetic field that is directed along the axis. The closely spaced field lines there indicate a strong magnetic field. Outside the solenoid the field lines are widely spaced; the field there is very weak.

## 29.5: Solenoids:

**Fig. 29-19** Application of Ampere's law to a section of a long ideal solenoid carrying a current  $i$ . The Amperian loop is the rectangle  $abcd$ .



$$\oint \vec{B} \cdot d\vec{s} = \mu_0 i_{\text{enc}},$$

$$\oint \vec{B} \cdot d\vec{s} = \int_a^b \vec{B} \cdot d\vec{s} + \int_b^c \vec{B} \cdot d\vec{s} + \int_c^d \vec{B} \cdot d\vec{s} + \int_d^a \vec{B} \cdot d\vec{s}.$$

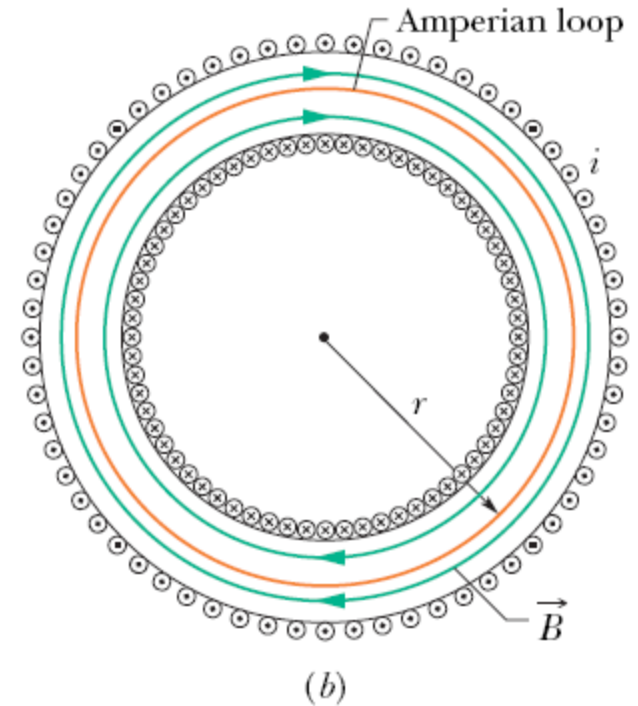
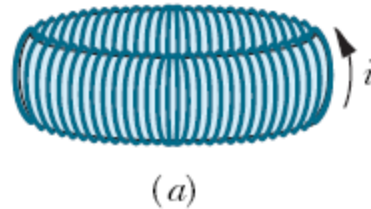
$i_{\text{enc}} = i(nh)$ . Here  $n$  be the number of turns per unit length of the solenoid

$$Bh = \mu_0 in h$$

$$B = \mu_0 in \quad (\text{ideal solenoid}).$$



## 29.5: Magnetic Field of a Toroid:



**Fig. 29-20** (a) A toroid carrying a current  $i$ . (b) A horizontal cross section of the toroid. The interior magnetic field (inside the bracelet-shaped tube) can be found by applying Ampere's law with the Amperian loop shown.

$$(B)(2\pi r) = \mu_0 i N,$$

where  $i$  is the current in the toroid windings (and is positive for those windings enclosed by the Amperian loop) and  $N$  is the total number of turns. This gives

$$B = \frac{\mu_0 i N}{2\pi r} \quad (\text{toroid}).$$

## Example, The field inside a solenoid:

A solenoid has length  $L = 1.23$  m and inner diameter  $d = 3.55$  cm, and it carries a current  $i = 5.57$  A. It consists of five close-packed layers, each with 850 turns along length  $L$ . What is  $B$  at its center?

### KEY IDEA

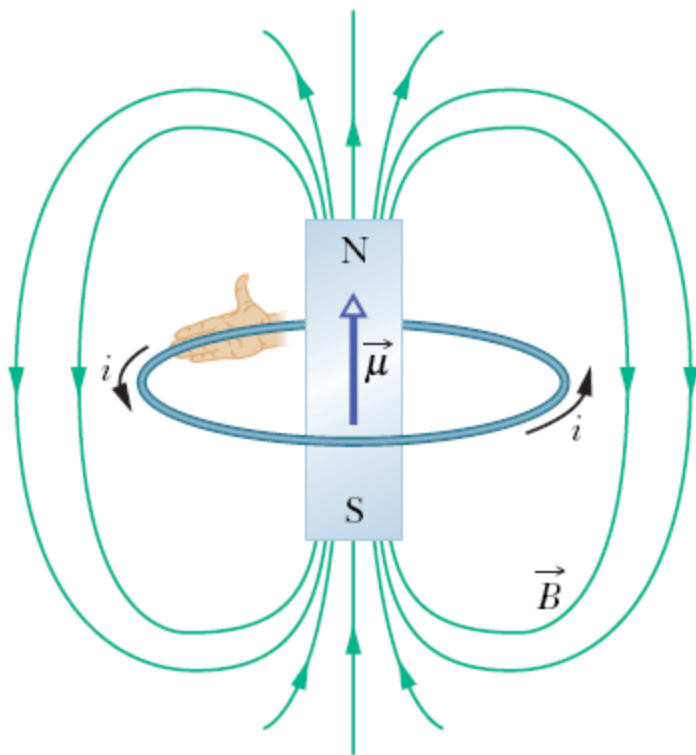
The magnitude  $B$  of the magnetic field along the solenoid's central axis is related to the solenoid's current  $i$  and number of turns per unit length  $n$  by Eq. 29-23 ( $B = \mu_0 in$ ).

**Calculation:** Because  $B$  does not depend on the diameter of the windings, the value of  $n$  for five identical layers is simply five times the value for each layer. Equation 29-23 then tells us

$$\begin{aligned} B &= \mu_0 in = (4\pi \times 10^{-7} \text{ T}\cdot\text{m/A})(5.57 \text{ A}) \frac{5 \times 850 \text{ turns}}{1.23 \text{ m}} \\ &= 2.42 \times 10^{-2} \text{ T} = 24.2 \text{ mT.} \end{aligned} \quad (\text{Answer})$$

To a good approximation, this is the field magnitude throughout most of the solenoid.

## 29.6: A Current Carrying Coil as a Magnetic Dipole:



**Fig. 29-21** A current loop produces a magnetic field like that of a bar magnet and thus has associated north and south poles. The magnetic dipole moment  $\vec{\mu}$  of the loop, its direction given by a curled-straight right-hand rule, points from the south pole to the north pole, in the direction of the field  $\vec{B}$  within the loop.

$$B(z) = \frac{\mu_0 i R^2}{2(R^2 + z^2)^{3/2}},$$

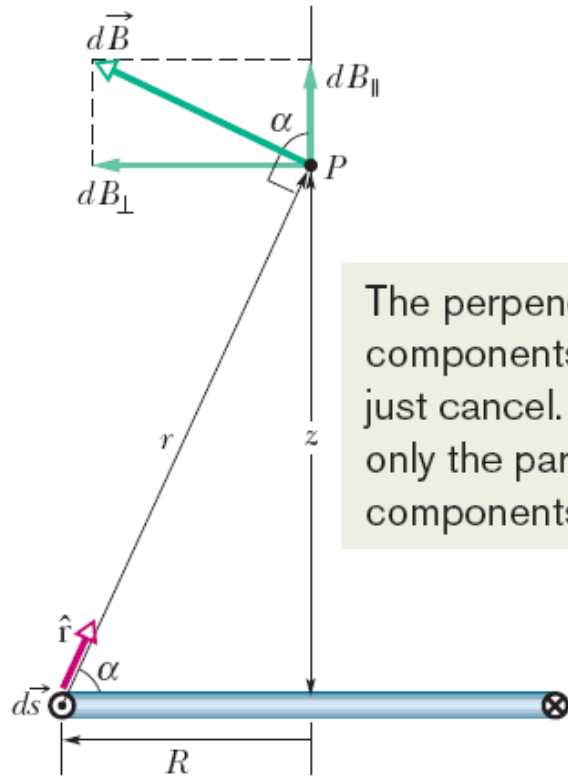
$$z \gg R$$

$$B(z) \approx \frac{\mu_0 i R^2}{2z^3}.$$

$$B(z) = \frac{\mu_0}{2\pi} \frac{NiA}{z^3}.$$

$$\vec{B}(z) = \frac{\mu_0}{2\pi} \frac{\vec{\mu}}{z^3} \quad (\text{current-carrying coil}).$$

## 29.6: A Current Carrying Coil as a Magnetic Dipole:



The perpendicular components just cancel. We add only the parallel components.

**Fig. 29-22** Cross section through a current loop of radius  $R$ . The plane of the loop is perpendicular to the page, and only the back half of the loop is shown. We use the law of Biot and Savart to find the magnetic field at point  $P$  on the central perpendicular axis of the loop.

$$dB = \frac{\mu_0}{4\pi} \frac{i ds \sin 90^\circ}{r^2}.$$

$$dB_{\parallel} = dB \cos \alpha = \frac{\mu_0 i \cos \alpha ds}{4\pi r^2}.$$

$$r = \sqrt{R^2 + z^2}$$

$$\cos \alpha = \frac{R}{r} = \frac{R}{\sqrt{R^2 + z^2}}.$$

$$dB_{\parallel} = \frac{\mu_0 i R}{4\pi (R^2 + z^2)^{3/2}} ds.$$

$$B = \int dB_{\parallel}$$

$$= \frac{\mu_0 i R}{4\pi (R^2 + z^2)^{3/2}} \int ds$$

$$B(z) = \frac{\mu_0 i R^2}{2(R^2 + z^2)^{3/2}}.$$